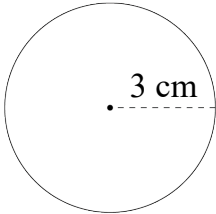
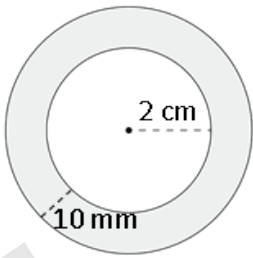
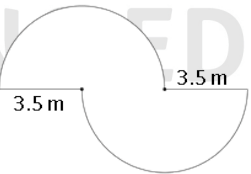
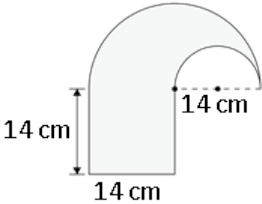


圓周 VS 圓面積

	周界		面積
1.		 <p>A circle with a center point and a dashed line representing a radius of 3 cm.</p>	
2.		 <p>An annulus (ring shape) with an inner radius of 2 cm and an outer radius of 10 mm.</p>	
3.		 <p>A shape consisting of two semicircles joined at their diameters. Each diameter is labeled as 3.5 m.</p>	
4.		 <p>A square with side length 14 cm. A quarter-circle is cut out from the top-right corner with a radius of 14 cm.</p>	

風穎教育
FUNG WIN EDUCATION

